



### General Instructions for the Examinee

#### Opening Instructions:

Welcome to the world Maths Championship. Before we commence, please pay close attention to the following instructions:

- Electronic devices such as cell phones and MP3 players must be turned off.
- Do not share or exchange materials with other students.
- Unauthorized aids are strictly prohibited and its use can lead to disqualification.
- Calculators are not allowed for Grade 1-5
- Scientific Calculators are allowed for Grade 6-8
- Refrain from consulting notes, textbooks, teachers, or other students regarding the exam materials.

#### Instructions for Filling Student Details in OMR Sheet and Signing the Attendance sheet:

*There will be a ten-minute break for students to fill in the details*

##### Filling Student Details:

- Please refer to the instructions at the back of the OMR sheet for proper completion your details. Ensure you darken circles completely. Questions

##### Signing Attendance sheet:

- Ensure you have signed the attendance sheet and OMR sheet provided.
- Invigilator should also sign your OMR sheet in the space provided.

marks - Total 35 marks.

- Grades 5 to 8: 50 questions of 1 mark each, there is no negative marking and if you skip/leave a question no marks will be given but also no marks will be deducted as -ve marks - Total 50 marks.

- Darken the circle corresponding to your chosen answer on the OMR sheet.
- that do not have the darker circle are considered unanswered and will be counted wrong.
- You have 60 minutes to complete the exam.
- Note that you can choose only one answer – if you mark another response, that question will be disqualified.
- If you finish before the time is up, raise your hand, and the invigilator will collect your sheet for scoring. When you are finished and your OMR Sheet is collected, please leave the room quietly.

#### Instruction for Taking Examination:

- The question paper has been sealed by a reverse jacket. You have to cut on the right side to open the paper at the time of commencement of the examination. Check whether all the pages of the question paper are intact.
- This Examination is multiple-choice based, with either 4 options, 3 options or 2 options for each question.
- Each grade level has specific question formats and durations:
  - Grades 1 to 4: 35 questions of 1 mark each, there is no negative marking and if you skip/leave a question no marks will be given but also no marks will be deducted as -ve


*Thank you for your attention, and best of luck with the World Maths Championship!*

**Question: 1 of 20**

QID: 1069

Marks : 1


Which object is shaped like a triangle?

**Question: 9 of 20**

QID: 1111

Marks : 1

Light helps you see. Select the picture with less light.

**Question: 2 of 20**

QID: 1079

Marks : 1

Texture is how something feels when you touch it. Which animal feels rough?

**Question: 10 of 20**

QID: 1119

Marks : 1

Forces make things things move. What kind of force is shown?


 A. push

 B. pull
**Question: 3 of 20**

QID: 1080

Marks : 1

Texture is how something feels when you touch it. Which animal feels soft?

**Question: 11 of 20**

QID: 1120

Marks : 1

Forces make things things move. What kind of force is shown?


 A. pull

 B. push
**Question: 4 of 20**

QID: 1081

Marks : 1

Texture is how something feels when you touch it. Which animal feels slimy?




tortoise shell

**Question: 12 of 20**

QID: 1121

Marks : 1

Forces make things things move. What kind of force is shown?


 A. push

 B. pull
**Question: 5 of 20**

QID: 1089

Marks : 1

Which toothbrush is longer?

**Question: 13 of 20**

QID: 1123

Marks : 1

The bear eats berries. What need does this meet?



 A. water

 B. food
**Question: 7 of 20**

QID: 1109

Marks : 1

Light helps you see. Select the picture with more light.

**Question: 14 of 20**

QID: 1153

Marks : 1

Select the living thing.



 A. a jump rope

 B. a raspberry bush
**Question: 8 of 20**

QID: 1110

Marks : 1


Light helps you see. Select the picture with more light.

**Question: 15 of 20**

QID: 1188

Marks : 1

We live on a planet called Earth. Earth is covered with land and water. This is a model of Earth Most of the model is blue. What does the blue part show?.


 A. land

 B. water

**Question: 16 of 20**

QID: 1198

Marks : 1

Mason has some books he doesn't read anymore. He wants the books to be reused. What should Mason do?

- A.** throw the books away
- B.** give the books to the local library

**Question: 17 of 20**

QID: 1199

Marks : 1

Finn wants to drink some hot chocolate. Finn wants to reduce his waste. Waste is anything that gets thrown away. What should Finn do?

- A.** he should drink his hot chocolate from a paper cup
- B.** he should drink his hot chocolate from a mug

**Question: 18 of 20**

QID: 1315

Marks : 1

Jen is camping on the beach with her family. She wakes up early and walks to the water. The sky is beautiful ! What does she see?



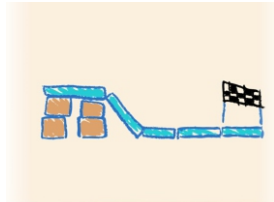
- A.** sun
- B.** moon
- C.** star

**Question: 19 of 20**

QID: 1305

Marks : 1

Jack is building a race car track! He wants the race car to reach the finish line. Jack draws a picture of his idea. This drawing is called a design. What does Jack want the race car to do?



- A.** go down the ramp and then to the finish line
- B.** go up the ramp and then to the finish line

**Question: 20 of 20**

QID: 1306

Marks : 1

Jack wants to test his race track design. What should he do first?

- A.** make a design
- B.** push the car down the racetrack
- A.** watch the car reach the finish line

--- END OF QUESTION PAPER ---